





BAL BHARATI PUBLIC SCHOOL

SECTOR-14, ROHINI, DELHI

PRACTICE WORKSHEET

CLASS-II _ MATHS _ DIVISION

Q 1. Divide the food between the kids. Circle the correct one.

			
$5 \times 2 =$	$12 \div 4 =$	$3 \times 3 =$	$6 \div 2 =$
$8 \div 4 =$	$8 - 4 =$	$3 + 3 =$	$6 \times 10 =$

Q 2. Solve the following.



Share these balls equally among

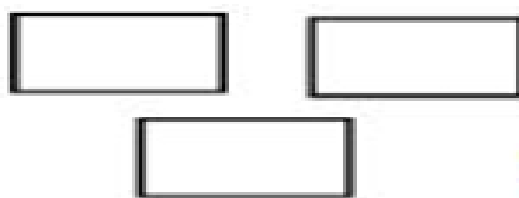
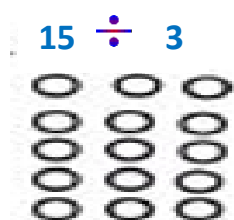
(a) 2 children

(b) 5 children

Each child gets _____ balls.

Each child gets _____ balls.

Q 3. Divide into equal groups by drawing dots.



Q 4. Divide the given smileys in group of 6. Also write the division equation.



Division equation – _____