

**BAL BHARATI PUBLIC SCHOOL
SEC.14, ROHINI**

**Creative Critical Thinking
Worksheet-7
Answer key**

MATHS





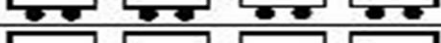

CLASS III



PREPARED BY- MANISHA MATHUR

BAL BHARATI PUBLIC SCHOOL, ROHINI

The pictograph below shows number of cars Mr. Williams repaired last year

Day	Number of cars repaired
Monday	
Tuesday	
Wednesday	
Thursday	
Friday	
Saturday	
Sunday	

Key:  represents 6 cars

Q1. How many cars were repaired on Monday? 18

Q2. On which day maximum cars were repaired? thursday

Q3. Did he repair 30 cars on Wednesday? no

Q4. On which day Mr. Williams did not work? sunday

Q5. How many cars did he repair on Friday and Saturday? 48

Q6. How many more cars did he repair on Thursday than on Wednesday? 30

