

**BAL BHARATI PUBLIC SCHOOL
SEC. 14, ROHINI**

**Creative Critical Thinking
Worksheet-1**

MATHS

CLASS III



PREPARED BY- MANISHA MATHUR

ASST. TEACHER (MATHS)

BAL BHARATI PUBLIC SCHOOL, ROHINI

HOW OLD AM I?

Read the description of the kids to find their ages. Write their ages below.

- + Ruhis 3 year older than Mita
- + Riya is same age as Rohan
- + Tina is two year older than Ruhi
- + Mita is 9 year old
- + Rohan is 3 years younger than Tina and two years older than Ravi



ROHAN



RUHI



TINA



MITA



RAVI



RIYA

Q1. Clues have been given about six friends Rohan, Ruhi, Tina, Mita, Ravi, Riya's ages. Read the clue boxes for each carefully and find their missing ages

ROHAN

RUHI

TINA

MITA

RIYA

RAVI

Q2. Fill in each



with

$+$, $-$, \times , \div


3



3



3



3

= 0

3



3



3



3

= 0

3



3





3



3

= 0

Q3. How many different numbers can be made from these four playing cards?



HINT- Starting with the digit 3 you can get 6 numbers 3194, 3149, 3914, 3941, 3419, 3491. since there are four digits given, find the total numbers

Q4 Which fly am I. The number pasted on me is more than 40 and less than 60 and the digit in the ones place is twice the digit in the tens place.



(1)



(2)



(3)

A (2)

B (1)

C (3)